

# Colour & Shape (2)B




## Student B:

Tell your partner how to draw and colour the shapes.  
 Draw and colour your shapes inside the boxes.  
 Then write sentences describing the shapes.

- ▶ This is a red polygon.
- ▶ These are yellow stars.




1.




Draw a \_\_\_\_\_.  
 Colour it \_\_\_\_\_.

2.




Draw a triangle.  
 Colour it blue.

3.




Draw 3 stars.  
 Colour them yellow.


4.



5.



6.



Draw 5 hearts.  
 Colour them pink.


# Maths



## What are the answers?

What is the answer?

First write the answers in numbers underneath.  
 Then write them in words on the crossword puzzle.



- |           |             |       |            |            |       |
|-----------|-------------|-------|------------|------------|-------|
| 1.        | $3 + 2 =$   | _____ | 10. across | $4 + 3 =$  | _____ |
| 2.        | $10 + 6 =$  | _____ | 10. down   | $4 + 13 =$ | _____ |
| 3.        | $12 - 11 =$ | _____ | 11.        | $9 - 3 =$  | _____ |
| 4.        | $15 - 2 =$  | _____ | 12.        | $10 + 2 =$ | _____ |
| 5.        | $9 + 9 =$   | _____ | 13.        | $20 - 1 =$ | _____ |
| 6.        | $10 - 1 =$  | _____ | 14.        | $4 + 10 =$ | _____ |
| 7. across | $5 + 5 =$   | _____ | 15.        | $4 + 4 =$  | _____ |
| 7. down   | $11 + 9 =$  | _____ | 16.        | $10 - 8 =$ | _____ |
| 8.        | $6 - 3 =$   | _____ | 17.        | $20 - 5 =$ | _____ |
| 9.        | $9 + 2 =$   | _____ | 18.        | $10 - 6 =$ | _____ |